

ASSALAM O ALAIKUM

All Dearz fellows

ALL IN ONE MTH202 Final term PAPERS &
MCQz

Created BY Farhan & Ali

BS (cs) 2nd sem

www.vrshc.com

This solution is only for taking idea, Human mistakes and errors are possible. so please be careful and best regards

Message by

VRSHC TEAM

FINALTERM EXAMINATION

Spring 2009

MTH202- Discrete Mathematics (Session - 2)

Time: 120 min

Marks: 80

Question No: 1 (Marks: 1) - Please choose one

The negation of "Today is Friday" is

- ▶ Today is Saturday
- ▶ **Today is not Friday**
- ▶ Today is Thursday

Question No: 2 (Marks: 1) - Please choose one

An arrangement of rows and columns that specifies the truth

VIRTUAL RESOURCE AND STUDENTS HELP CENTER

value of a compound proposition for all possible truth values of its constituent propositions is called

- ▶ **Truth Table**
- ▶ Venn diagram
- ▶ False Table
- ▶ None of these

Question No: 3 (Marks: 1) - Please choose one

The converse of the conditional statement $p \rightarrow q$ is

- ▶ **$q \rightarrow p$**
- ▶ $\sim q \rightarrow \sim p$
- ▶ $\sim p \rightarrow \sim q$
- ▶ None of these

Question No: 4 (Marks: 1) - Please choose one

Contrapositive of given statement "If it is raining, I will take an umbrella" is

▶ I will not take an umbrella if it is not raining.

▶ I will take an umbrella if it is raining.

▶ It is not raining or I will take an umbrella.

▶ None of these.

Question No: 5 (Marks: 1) - Please choose one

Let $A = \{1, 2, 3, 4\}$ and $R = \{(1, 1), (2, 2), (3, 3), (4, 4)\}$ then

▶ R is symmetric.

▶ R is anti symmetric.

▶ R is transitive.

▶ R is reflexive.

▶ All given options are true

Question No: 6 (Marks: 1) - Please choose one

A binary relation R is called Partial order relation if

▶ It is Reflexive and transitive

▶ It is symmetric and transitive

▶ It is reflexive, symmetric and transitive

▶ It is reflexive, antisymmetric and transitive

Question No: 7 (Marks: 1) - Please choose one

How many functions are there from a set with three elements to a set with two elements?

- ▶ 6
- ▶ **8**
- ▶ 12

Question No: 8 (Marks: 1) - Please choose one

$1, 10, 10^2, 10^3, 10^4, 10^5, 10^6, 10^7, \dots$ is

- ▶ **Arithmetic series**
- ▶ Geometric series
- ▶ Arithmetic sequence
- ▶ Geometric sequence

Question No: 9 (Marks: 1) - Please choose one

$[x]$ for $x = -2.01$ is

- ▶ -2.01
- ▶ -3
- ▶ **-2**
- ▶ -1.99

Question No: 10 (Marks: 1) - Please choose one

If A and B are two disjoint (mutually exclusive) events then

$$P(A \cup B) =$$

VIRTUAL RESOURCE AND STUDENTS HELP CENTER

- ▶ $P(A) + P(B) + P(A \cap B)$
- ▶ $P(A) + P(B) + P(A \cup B)$
- ▶ $P(A) + P(B) - P(A \cap B)$
- ▶ $P(A) + P(B) - P(A \cup B)$
- ▶ **$P(A) + P(B)$**

Question No: 11 (Marks: 1) - Please choose one

If a die is thrown then the probability that the dots on the top are prime numbers or odd numbers is

- ▶ 1
- ▶ $\frac{1}{3}$
- ▶ $\frac{2}{3}$

Question No: 12 (Marks: 1) - Please choose one

If $P(A \cap B) \neq P(A)P(B)$ then the events A and B are called

- ▶ Independent
- ▶ **Dependent** page 270
- ▶ Exhaustive

Question No: 13 (Marks: 1) - Please choose one

A rule that assigns a numerical value to each outcome in a sample space is called

- ▶ One to one function
- ▶ Conditional probability
- ▶ **Random variable**

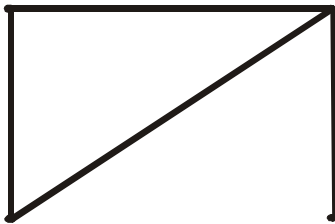
Question No: 14 (Marks: 1) - Please choose one

The expectation of x is equal to

- ▶ Sum of all terms
- ▶ Sum of all terms divided by number of terms
- ▶ $\sum xf(x)$

Question No: 15 (Marks: 1) - Please choose one

The degree sequence $\{a, b, c, d, e\}$ of the given graph is



- ▶ 2, 2, 3, 1, 1
- ▶ 2, 3, 1, 0, 1
- ▶ 0, 1, 2, 2, 0
- ▶ **2, 3, 1, 2, 0**

page305

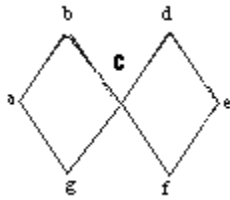
Question No: 16 (Marks: 1) - Please choose one

Which of the following graph is not possible?

- ▶ Graph with four vertices of degrees 1, 2, 3 and 4.
- ▶ **Graph with four vertices of degrees 1, 2, 3 and 5.**
- ▶ Graph with three vertices of degrees 1, 2 and 3.
- ▶ Graph with three vertices of degrees 1, 2 and 5.

Question No: 17 (Marks: 1) - Please choose one

The graph given below



- ▶ Has Euler circuit
- ▶ Has Hamiltonian circuit
- ▶ **Does not have Hamiltonian circuit**

Question No: 18 (Marks: 1) - Please choose one

Let n and d be integers and $d \neq 0$. Then n is divisible by d or d divides n

If and only if

- ▶ **$n = k \cdot d$ for some integer k**
- ▶ $n = d$
- ▶ $n \cdot d = 1$
- ▶ none of these

Question No: 19 (Marks: 1) - Please choose one

The contradiction proof of a statement $p \rightarrow q$ involves

- ▶ **Considering p and then try to reach q**
- ▶ Considering $\sim q$ and then try to reach $\sim p$

VIRTUAL RESOURCE AND STUDENTS HELP CENTER

- ▶ Considering p and $\sim q$ and try to reach contradiction
- ▶ None of these

Question No: 20 (Marks: 1) - Please choose one

An integer n is prime if, and only if, $n > 1$ and for all positive integers r and s , if $n = r \cdot s$, then

- ▶ **$r = 1$ or $s = 1$.**
- ▶ $r = 1$ or $s = 0$.
- ▶ $r = 2$ or $s = 3$.
- ▶ None of these

Question No: 21 (Marks: 1) - Please choose one

The method of loop invariants is used to prove correctness of a loop with respect to certain pre and post-conditions.

- ▶ **True**
- ▶ False
- ▶ None of these

Question No: 22 (Marks: 1) - Please choose one

The greatest common divisor of 27 and 72 is

- ▶ 27
- ▶ 9
- ▶ 1
- ▶ None of these

Question No: 23 (Marks: 1) - Please choose one

If a tree has 8 vertices then it has

- ▶ 6 edges
- ▶ 7 edges
- ▶ 9 edges

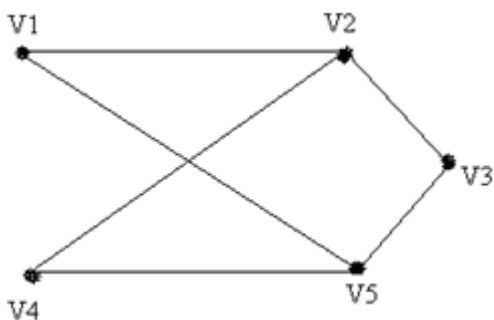
Question No: 24 (Marks: 1) - Please choose one

Complete graph is planar if

- ▶ $n = 4$
- ▶ $n > 4$
- ▶ $n \leq 4$

Question No: 25 (Marks: 1) - Please choose one

The given graph is



▶ **Simple graph**

- ▶ Complete graph
- ▶ Bipartite graph
- ▶ Both (i) and (ii)
- ▶ Both (i) and (iii)

Question No: 26 (Marks: 1) - Please choose one

The value of $0!$ Is

- ▶ 0
- ▶ **1** pg160
- ▶ Cannot be determined

Question No: 27 (Marks: 1) - Please choose one

Two matrices are said to be conformable for multiplication if

- ▶ Both have same order
- ▶ **Number of columns of 1st matrix is equal to number of rows in 2nd matrix**
- ▶ Number of rows of 1st matrix is equal to number of columns in 2nd matrix

Question No: 28 (Marks: 1) - Please choose one

The value of $(-2)!$ Is

- ▶ 0
- ▶ 1
- ▶ **Cannot be determined**

Question No: 29 (Marks: 1) - Please choose one

The value of $\frac{(n+1)!}{(n-1)!}$ is

- ▶ 0
- ▶ $n(n-1)$
- ▶ $n^2 + n$
- ▶ Cannot be determined

Question No: 30 (Marks: 1) - Please choose one

The number of k -combinations that can be chosen from a set of n elements can be written as

- ▶ ${}^n C_k$ pg223
- ▶ ${}^k C_n$
- ▶ ${}^n P_k$
- ▶ ${}^k P_k$

Question No: 31 (Marks: 1) - Please choose one

If the order does not matter and repetition is allowed then total number of ways for selecting k sample from n . is

- ▶ n^k
- ▶ $C(n+k-1, k)$ page 228
- ▶ $P(n, k)$
- ▶ $C(n, k)$

Question No: 32 (Marks: 1) - Please choose one

If the order matters and repetition is not allowed then total number of ways for selecting k sample from n . is

- ▶ n^k
- ▶ $C(n+k-1, k)$
- ▶ $P(n, k)$ page 228
- ▶ $C(n, k)$

Question No: 33 (Marks: 1) - Please choose one

To find the number of unordered partitions, we have to count the ordered partitions and then divide it by suitable number to erase the order in partitions

- ▶ **True** pg231
- ▶ False
- ▶ None of these

Question No: 34 (Marks: 1) - Please choose one

A tree diagram is a useful tool to list all the logical possibilities of a sequence of events where each event can occur in a finite number of ways.

- ▶ **True**
- ▶ False

Question No: 35 (Marks: 1) - Please choose one

If A and B are finite (overlapping) sets, then which of the following **must be true**

- ▶ $n(A \dot{\cup} B) = n(A) + n(B)$
- ▶ $n(A \dot{\cup} B) = n(A) + n(B) - n(A \cap B)$
- ▶ $n(A \dot{\cup} B) = \emptyset$
- ▶ None of these

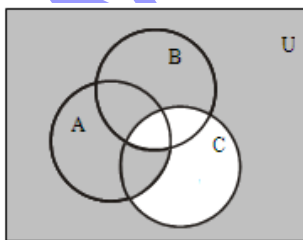
Question No: 36 (Marks: 1) - Please choose one

What is the output state of an OR gate if the inputs are 0 and 1?

- ▶ 0
- ▶ 1
- ▶ 2
- ▶ 3

Question No: 37 (Marks: 1) - Please choose one

In the given Venn diagram shaded area represents:



www.vrshc.com

This solution is only for taking idea, Human mistakes and errors are possible. so please be careful and best regards

Message by

VRSHC TEAM

www.vrshc.com

This solution is only for taking idea, Human mistakes and errors are possible. so please be careful and best regards

Message by

VRSHC TEAM

www.vrshc.com

This solution is only for taking idea, Human mistakes and errors are possible. so please be careful and best regards

Message by

VRSHC TEAM

www.vrshc.com

This solution is only for taking idea, Human mistakes and errors are possible. so please be careful and best regards

Message by

VRSHC TEAM

www.vrshc.com

This solution is only for taking idea, Human mistakes and errors are possible. so please be careful and best regards

Message by

VRSHC TEAM

www.vrshc.com

This solution is only for taking idea, Human mistakes and errors are possible. so please be careful and best regards

Message by

VRSHC TEAM

