

CS615 Software Project Management Solved Quiz No. 02 Fall 2012 on 11-02-2013

Time Left 87 sec(s)	
Quiz Start Time: 10:16 AM	
Question # 1 of 10 (Start time: 10:16:14 AM)	Total Marks: 1
The decomposition of a software project is one of the first tasks of...	
▶ Select correct option:	
<input type="radio"/> Software Engineer	
<input type="radio"/> Software project manager	Software project manager
<input type="radio"/> Software Analyst	
<input type="radio"/> Software tester	
▶ Click here to Save Answer & Move to Next Question	

Time Left 52 sec(s)	
Quiz Start Time: 10:16 AM	
Question # 2 of 10 (Start time: 10:17:14 AM)	Total Marks: 1
Describe where the work must be performed. Specify the location of hardware and software and where the people must perform the work is called _____	

▶ Select correct option:

- Scope of work
- Location of Work
- Period of Performance
- Deliverables Schedule

Location of Work

▶ [Click here to Save Answer & Move to Next Question](#)

Time Left **53**
sec(s)

Quiz Start Time: 10:16 AM

Question # 3 of 10 (Start time: 10:18:13 AM)

Total Marks: 1

A node on a network schedule is that point in time at which an activity -----.

▶ Select correct option:

- Begins
- Begins or Ends

Begins or Ends

Ends

None of given



Click here to Save Answer & Move to Next Question

Time Left **64**
sec(s)

Quiz Start Time: 10:16 AM

Question # 4 of 10 (Start time: 10:19:23 AM)

Total Marks: 1

Predecessor activities need to ----- before the next can begin. After a predecessor activity is completed, the successor activity becomes the predecessor for another activity.

 Select correct option:

Both start and end

End

Start

None of given



Click here to Save Answer & Move to Next Question

Time Left **59**
sec(s)

Quiz Start Time: 10:16 AM

Question # 5 of 10 (Start time: 10:20:20 AM)

Total Marks: 1

To ----- risks from occurring, the project team prepares the risk plan before the commencement of the project.

▶ Select correct option:

- Avoid
- Deal
- None of given
- Manage

▶ [Click here to Save Answer & Move to Next Question](#)

Time Left **74**
sec(s)

Quiz Start Time: 10:16 AM

Question # 6 of 10 (Start time: 10:21:15 AM)

Total Marks: 1

Software projectis an activity that distributes estimated effort across the planned project duration by allocating the effort to specific software engineering tasks.


▶ Select correct option:

Scheduling

Cost Estimation

Risk Management

Both Later and Middle Stage

 [Click here to Save Answer & Move to Next Question](#)

Time Left **43** sec(s)

Quiz Start Time: 10:16 AM

Question # 7 of 10 (Start time: 10:21:41 AM)

Total Marks: 1

A macroscopic schedule is developed at ...


 Select correct option:

Early Stage

Middle Stage

Later Stage

Both Later and Meddle Stage

 [Click here to Save Answer & Move to Next Question](#)

Time Left **25**
sec(s)

Quiz Start Time: 10:16 AM

Question # 8 of 10 (Start time: 10:22:48 AM)

Total Marks: 1

Which of the following is displayed as an S-curve?


 Select correct option:

Gantt

Cost baseline

Critical path

PERT

 [Click here to Save Answer & Move to Next Question](#)

Time Left **15**
sec(s)

Quiz Start Time: 10:16 AM

Question # 9 of 10 (Start time: 10:24:04 AM)

Total Marks: 1

Design decomposition of a software project is a division of the system into

▶ Select correct option:

- Operational components
- High level Components
- Low level Modules
- High level Components and Low level Modules

Low level Modules

▶ [Click here to Save Answer & Move to Next Question](#)

Time Left **72**
sec(s)

Quiz Start Time: 10:16 AM

Question # 10 of 10 (Start time: 10:25:22 AM)

Total Marks: 1

Each can be subdivided into sub tasks.

▶ Select correct option:

- None of given
- Program

Task

Project



Time Left 68 sec(s)

Quiz Start Time: 10:34 AM

Question # 1 of 10 (Start time: 10:34:50 AM) **Total Marks: 1**

Using PERT and CPM, -----, helps you complete a project on time. By using these techniques, you can determine the latest time by when an activity should start to be completed on time.


Select correct option:

Individually

Combination

Individual and Combine

None of given

 [Click here to Save Answer & Move to Next Question](#)

Time Left **63**
sec(s)

Quiz Start Time: 10:34 AM


Question # 2 of 10 (Start time: 10:35:45 AM) Total Marks: 1

Over the course of the project, a comparison of the due date and the date delivered provides a metric for how well deliverable dates are by the project team.

 Select correct option:

- Met
- Scheduled
- None of given

Changed

 [Click here to Save Answer & Move to Next Question](#)

Time Left **60**
sec(s)

Quiz Start Time: 10:34 AM

Question # 3 of 10 (Start time: 10:36:50 AM)

Total Marks: 1

_____ is based on soft skills and relies more on human factors, such as collecting information during group discussions

 Select correct option:

- Source lines of Code (SLOC)
- Function Point (FP)
- Constructive Cost Model (COCOMO)

Delphi technique

Delphi technique



Click here to Save Answer & Move to Next Question

Quiz Start Time: 10:34 AM

Time Left 83 sec(s)

Question # 4 of 10 (Start time: 10:37:34 AM)


Total Marks: 1

Which of the following is displayed as an S-curve?

 Select correct option:

- Gantt
- Cost baseline
- Critical path

PERT

 [Click here to Save Answer & Move to Next Question](#)

Quiz Start Time: 10:34 AM

Time Left 71 sec(s)

Question # 5 of 10 (Start time: 10:37:52 AM) **Total Marks: 1**

Describe where the work must be performed. Specify the location of hardware and software and where the people must perform the work is called _____

 **Select correct option:**


Scope of work

Location of Work

Location of Work

Period of Performance

Deliverables Schedule

 [Click here to Save Answer & Move to Next Question](#)

Time Left **33**
sec(s)

Quiz Start Time: 10:34 AM

Question # 6 of 10 (Start time: 10:38:26 AM)

Total Marks: 1

To aid planning, scheduling, and monitoring a project, you can use tools_____

 Select correct option:

PERT and CPM

Timeline charts and Gantt charts

Both of given

Both of given

None of given



Click here to Save Answer & Move to Next Question

Time Left **74**
sec(s)

Quiz Start Time: 10:34 AM

Question # 7 of 10 (Start time: 10:39:37 AM)

Total Marks: 1

There are _____ types of Work Breakdown Structures.

 Select correct option:

None of given

Two

Two

Three

Four



Click here to Save Answer & Move to Next Question

Time Left **52**
sec(s)

Quiz Start Time: 10:34 AM

Question # 8 of 10 (Start time: 10:40:06 AM)

Total Marks: 1

Which of the following Technique use network schedules to trace the completion of predetermined activities.

 Select correct option:

- Gantt Charts
- PERT
- CPM

PERT and CPM

PERT and CPM



Click here to Save Answer & Move to Next Question

Quiz Start Time: 10:34 AM

Time Left 25 sec(s)

Question # 9 of 10 (Start time: 10:40:55 AM)

Total Marks: 1

Which of the following reason delays the Software Projects


 Select correct option:

Incorrect initial estimates

Technical defficulties

Human defficulties

Incorrect initial estimates, Technical and Human defficulties

 [Click here to Save Answer & Move to Next Question](#)

Time Left **49**
sec(s)

Quiz Start Time: 10:34 AM

Question # 10 of 10 (Start time: 10:42:21 AM)

Total Marks: 1

A node on a network schedule is that point in time at which an activity -----.

 **Select correct option:**

Begins

Begins or Ends

Begins or Ends

Ends

None of given



Click here to Save Answer & Move to Next Question

Time Left **18**
sec(s)

Quiz Start Time: 11:14 AM

Question # 1 of 10 (Start time: 11:14:23 AM)

Total Marks: 1

In _____ the planner develops estimates of the information domain.

 Select correct option:

- Function point sizing
- Standard component sizing
- Change sizing

All of given



Click here to Save Answer & Move to Next Question

Time Left **13**
sec(s)

Quiz Start Time: 11:14 AM

Question # 2 of 10 (Start time: 11:15:37 AM)

Total Marks: 1

Lessons learned are important to document because an organization can use them to improve future projects and the Project Management process. Therefore, in project closing procedures, it is helpful to review the

 Select correct option:


Checklists for risk identification

WBS

Original contract

All of given

All of given

 [Click here to Save Answer & Move to Next Question](#)

Quiz Start Time: 11:14 AM

Time Left 64 sec(s)

Question # 3 of 10 (Start time: 11:16:56 AM) Total Marks: 1

Predecessor activities need to ----- before the next can begin. After a predecessor activity is completed, the successor activity becomes the predecessor for another activity.

 **Select correct option:**

Both start and end

End

Start

None of given



Click here to Save Answer & Move to Next Question

Time Left **70**
sec(s)

Quiz Start Time: 11:14 AM

Question # 4 of 10 (Start time: 11:17:25 AM)

Total Marks: 1

Decomposition of the system into smaller components needs to be done ... in the planning cycle.

 Select correct option:

Late stage

Middle

Early

Early

Middle and Late stage



Click here to Save Answer & Move to Next Question

Time Left **66**
sec(s)

Quiz Start Time: 11:14 AM

Question # 5 of 10 (Start time: 11:17:48 AM)

Total Marks: 1

A macroscopic schedule is developed at ...

 Select correct option:

Early Stage

Early Stage

Middle Stage

Later Stage

Both Later and Meddle Stage



Click here to Save Answer & Move to Next Question

Time Left **43**
sec(s)

Quiz Start Time: 11:14 AM

Question # 6 of 10 (Start time: 11:18:15 AM)

Total Marks: 1

Which of the following reason delays the Software Projects


 Select correct option:

Incorrect initial estimates

Technical defficulties

Human defficulties

Incorrect initial estimates, Technical and Human difficulties

 [Click here to Save Answer & Move to Next Question](#)

Quiz Start Time: 11:14 AM

Time Left **65** sec(s)

Question # 7 of 10 (Start time: 11:19:04 AM) Total Marks: 1

Describe where the work must be performed. Specify the location of hardware and software and where the people must perform the work is called _____

 **Select correct option:**

Scope of work

Location of Work

Period of Performance

Deliverables Schedule



Click here to Save Answer & Move to Next Question

Time Left **69**
sec(s)

Quiz Start Time: 11:14 AM

Question # 8 of 10 (Start time: 11:19:31 AM)

Total Marks: 1

A change in the arrangement of tasks can occur on the basis of ... theories of WBS.

 Select correct option:

Two

Three

Four

Single



Click here to Save Answer & Move to Next Question

Time Left **65**
sec(s)

Quiz Start Time: 11:14 AM

Question # 9 of 10 (Start time: 11:19:54 AM)

Total Marks: 1

Each can be subdivided into sub tasks.

 Select correct option:

None of given

Program

Task

Task



Project



Click here to Save Answer & Move to Next Question